

This week we will be looking at money. If you can take some photos of you completing some of the activities and add them to the email on Purple Mash that would be amazing. I will also set up a Blog on Purple Mash for money so you can share some of your learning plus if you have any questions then you can also ask if you don't understand.

Week
Commencing
20th April

Maths

English Money

- Watch the video link which explains the coins we use in the UK
- https://www.youtube.com/watch?v=vs8F_g3MGtM
- Watch the video link which explains the notes that we use in the UK.
- https://www.youtube.com/watch?v=5DDI_RlZB0c

Understanding your coin amounts

- Click on the sorting button and match the correct amount to understand your coins
- <https://www.topmarks.co.uk/money/coins-game>
- Next, click on the ordering coins and order different numbers of coins from the lowest value to the highest value.
- After that try the counting button, you have to count the money on the piggy bank and match it to one of the amounts at the bottom of the screen

Have a go at matching the money

Draw lines to join up the equal amounts of money - one has been done for you:

Self assessment:

😊 😞 😊

Have a go at matching these coins to an amount.









<https://www.doorwayonline.org.uk/activities/cashing-in/cashing-in.html>


Comparing Numbers

- Watch this video to remind yourself about comparing numbers
- <https://www.youtube.com/watch?v=rLZbniMGAVA>
- You can use greater than, less than and equal to with money.

Are these amounts more than, less than or equal? Draw in the amounts and either print screen or take a photo to send to me.

Write in the correct symbol (< > =) to make the calculations below correct.

		£1.57
		£1.15
£2.12		
£1.11		
£1.24		
		£1.76
		£2.12
£4.11		

		£4
		£2.50
£4.99		
£3.25		
£2.65		
		£3.78
		£3.26
£3.28		

Reasoning Question

Rosie has 5 silver coins in her purse.

She can make 40p with three coins.

She can also make 75p with three coins.

How much money does Rosie have in her purse?

Amir has 5 different coins in his wallet.



What is the greatest amount of money he could have in his wallet?

What is the least amount of money?

Pounds and Pence

Go through the power points on pounds and pence then complete the questions and reasoning questions.

Useful Websites for further learning

- <https://www.youtube.com/watch?v=8lXBXF5mSl8>
- <https://www.youtube.com/watch?v=xn6j8QrFwc4>
- https://www.youtube.com/watch?v=aGWvo_EtCJs
- <https://www.youtube.com/watch?v=WfpdhMuLvIY>
- <https://kids.classroomsecrets.co.uk/category/year-3/page/2/>